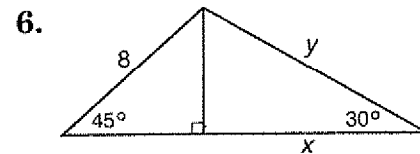
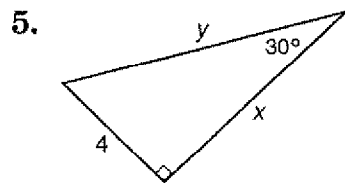
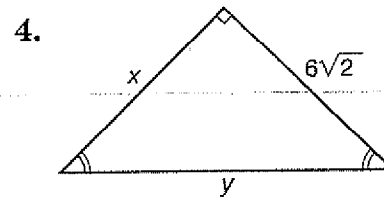
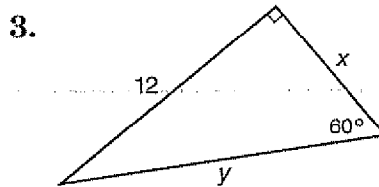
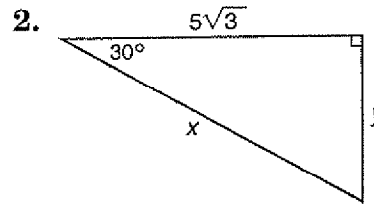
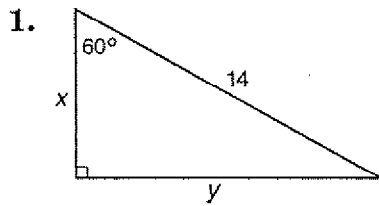


Practice

Special Right TrianglesFind the values of x and y .

7. Find the length of a diagonal of a square with sides 10 in. long.

8. Find the length of a side of a square whose diagonal is 4 cm.

9. One side of an equilateral triangle measures 6 cm. Find the measure of an altitude of the triangle.