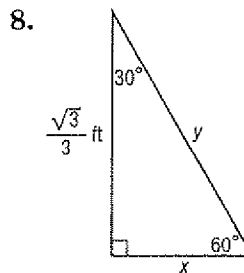
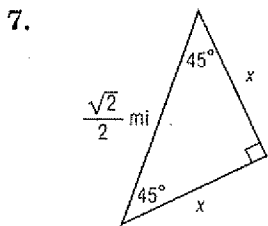
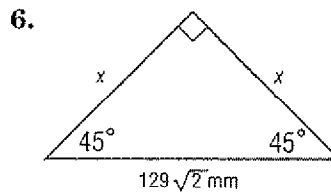
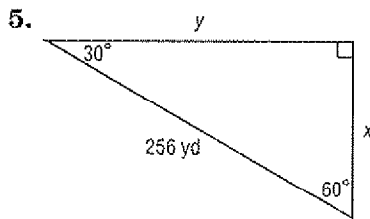
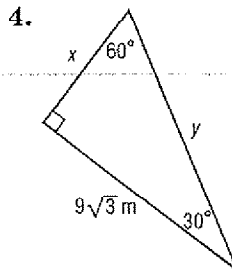
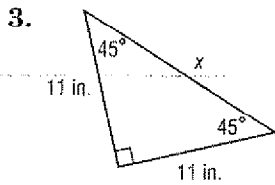
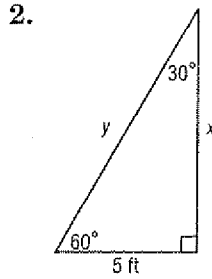
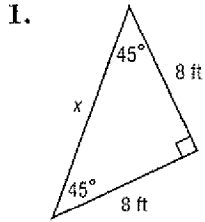


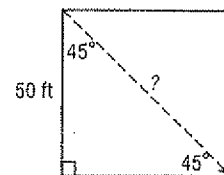
10-6 Practice

Special Right Triangles

Find each missing measure.



9. **SHORTCUTS** To get to school, Hari takes a shortcut across a square-shaped lot as shown in the drawing at the right. What is the distance of the shortcut Hari takes?



10. **LADDERS** A ladder leaning against the side of a building forms a 60° angle with the ground. If the ladder is 20 feet long, how far from the building is the base of the ladder?

Copyright © Glencoe/McGraw-Hill, a division of The McGraw-Hill Companies, Inc.