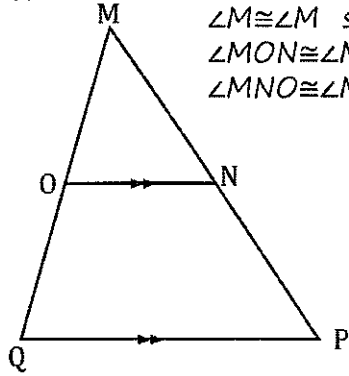




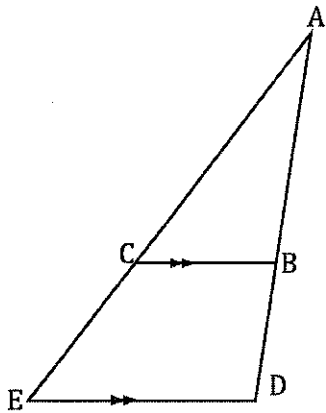
7.



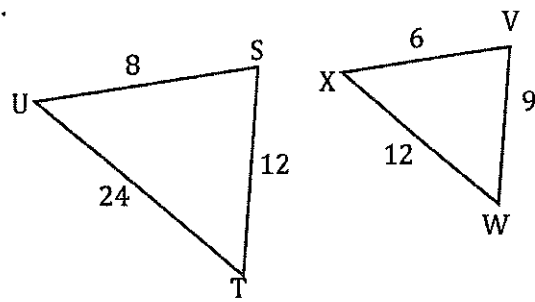
$\angle M \cong \angle M$ same angle
 $\angle MON \cong \angle MQP$ corresponding
 $\angle MNO \cong \angle MPQ$ corresponding

$\triangle MNO \sim \triangle MPQ$ by AAA
 or...
 $\triangle MNO \sim \triangle MPQ$ by AA

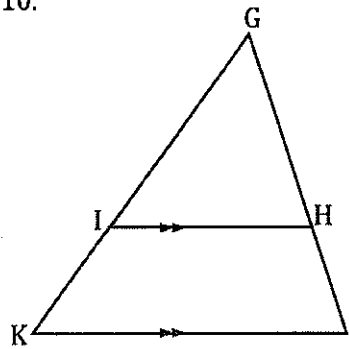
9.



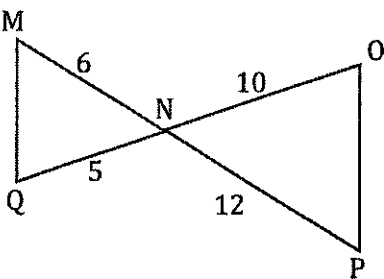
8.



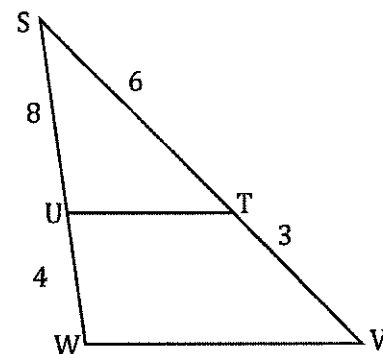
10.



11.



12.



Bubble the correct answer choice from each item above.

- A.
- B.
- C.
- D.

- A.
- B.
- C.
- D.

- A.
- B.
- C.
- D.

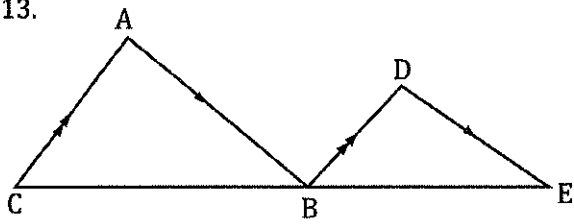
- A.
- B.
- C.
- D.

- A.
- B.
- C.
- D.

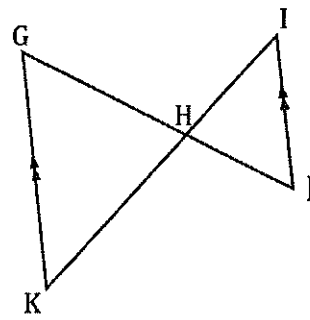
- A.
- B.
- C.
- D.



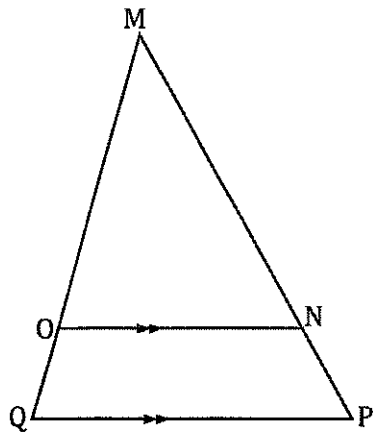
13.



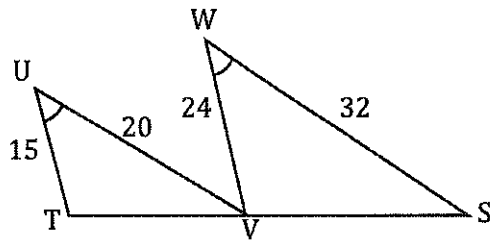
14.



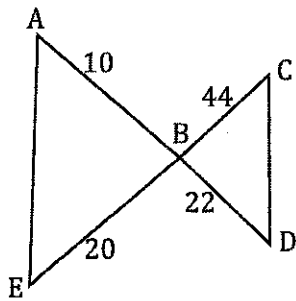
15.



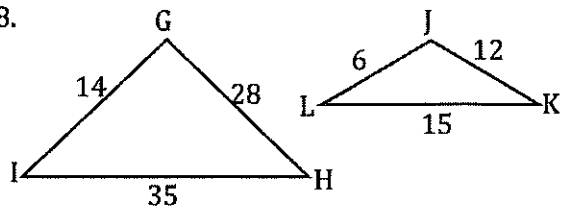
16.



17.



18.

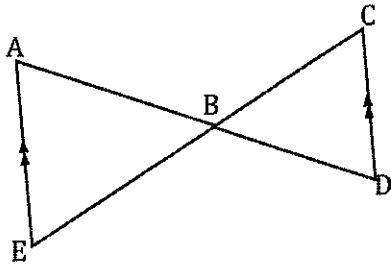


Bubble the correct answer choice from each item above.

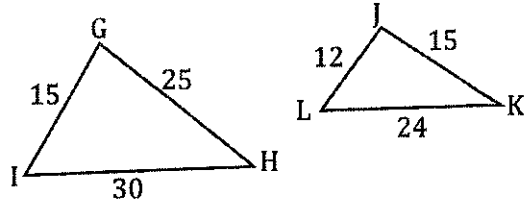
<input type="radio"/> A.	<input type="radio"/> A.	<input type="radio"/> A.	<input type="radio"/> A.	<input type="radio"/> A.	<input type="radio"/> A.
<input type="radio"/> B.	<input type="radio"/> B.	<input type="radio"/> B.	<input type="radio"/> B.	<input type="radio"/> B.	<input type="radio"/> B.
<input type="radio"/> C.	<input type="radio"/> C.	<input type="radio"/> C.	<input type="radio"/> C.	<input type="radio"/> C.	<input type="radio"/> C.
<input type="radio"/> D.	<input type="radio"/> D.	<input type="radio"/> D.	<input type="radio"/> D.	<input type="radio"/> D.	<input type="radio"/> D.



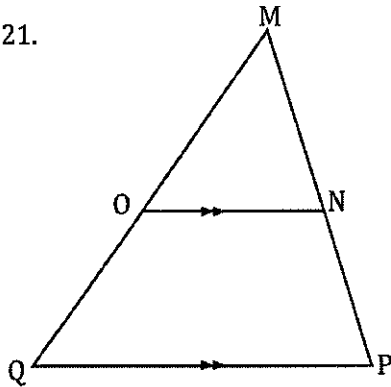
19.



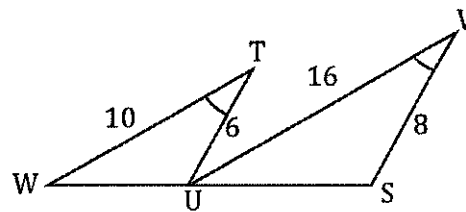
20.



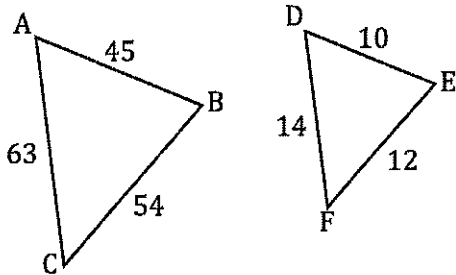
21.



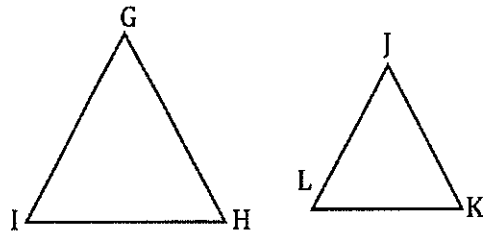
22.



23.



24. $\triangle GHI$ and $\triangle JKL$ are both equilateral.



Bubble the correct answer choice from each item above.

#19.	#20.	#21.	#22.	#23.	#24.
<input type="radio"/> A.	<input type="radio"/> A.	<input type="radio"/> A.	<input type="radio"/> A.	<input type="radio"/> A.	<input type="radio"/> A.
<input type="radio"/> B.	<input type="radio"/> B.	<input type="radio"/> B.	<input type="radio"/> B.	<input type="radio"/> B.	<input type="radio"/> B.
<input type="radio"/> C.	<input type="radio"/> C.	<input type="radio"/> C.	<input type="radio"/> C.	<input type="radio"/> C.	<input type="radio"/> C.
<input type="radio"/> D.	<input type="radio"/> D.	<input type="radio"/> D.	<input type="radio"/> D.	<input type="radio"/> D.	<input type="radio"/> D.