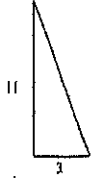


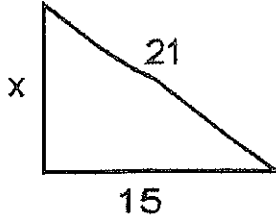
Name: _____

Pyth. in. asp. Rt. Δ Quiz
Practice

1) Find the missing side length:

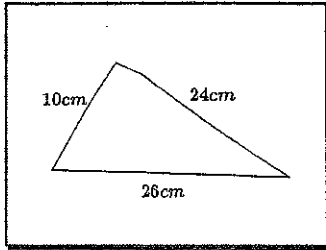


2) Find the missing side length:

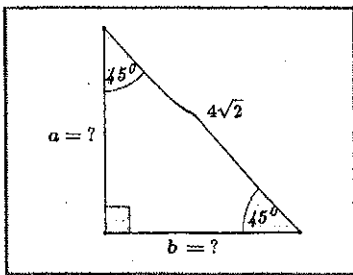


3) Is the triangle with sides 7cm, 8cm, and 10 cm a right triangle? How do you know?

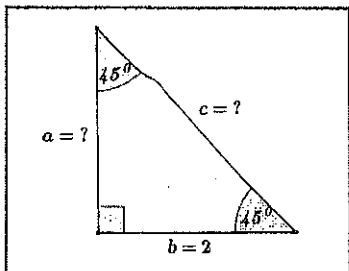
4) Is this a right triangle? How do you know?



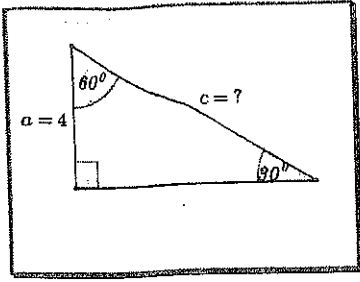
5) Find the lengths of the legs:



6) Find the missing side lengths:



7) Find the two missing side lengths:



8) Find the two missing side lengths

