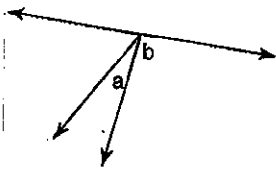


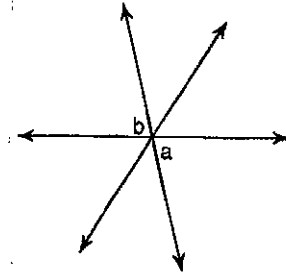
Diagram D

State whether the angle pairs are vertical, linear pair, adjacent, congruent, complementary, and/or supplementary.

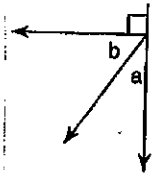
25.



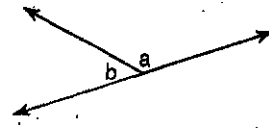
26.



27.

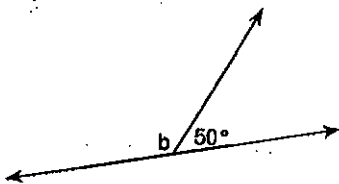


28.

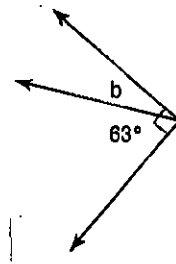


Find the value of b.

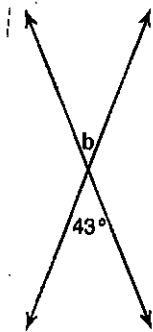
29.



30.



31.



32.

