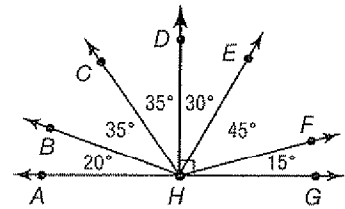


10-3 Skills Practice

Triangles

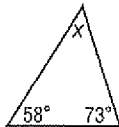
Classify each angle as *acute*, *obtuse*, *right*, or *straight*.

- | | |
|-----------------|-----------------|
| 1. $\angle AHB$ | 2. $\angle AHC$ |
| 3. $\angle AHD$ | 4. $\angle AHE$ |
| 5. $\angle AHF$ | 6. $\angle AHG$ |

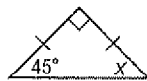


Find the value of x in each triangle. Then classify each triangle by its angles and by its sides.

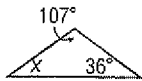
7.



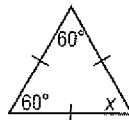
8.



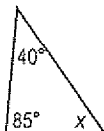
9.



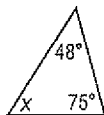
10.



11.

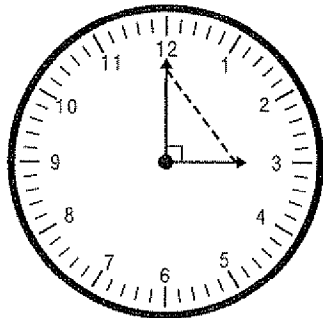


12.

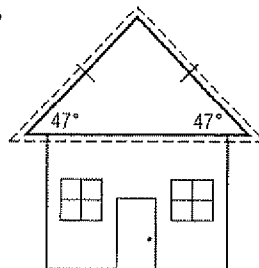


Classify each dashed triangle by its angles and by its sides.

13.



14.



15.

