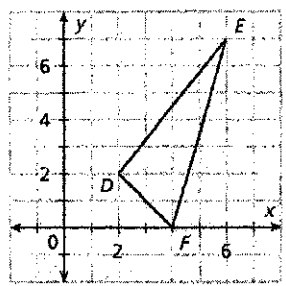


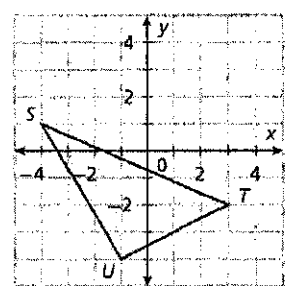
Additional Practice

Find the perimeter of the figure shown. Round to the nearest tenth of a unit.

1.



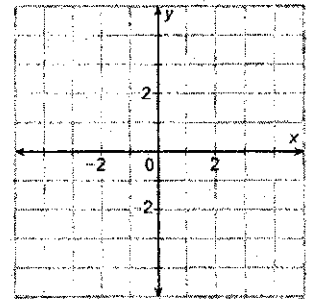
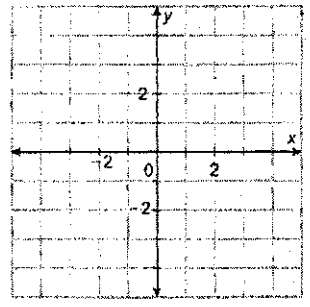
2.



Draw and classify each polygon with the given vertices. Find the perimeter of the polygon. Round to the nearest tenth if necessary.

3. $A(-2, 3)$, $B(3, 1)$, $C(-2, -1)$, $D(-3, 1)$

4. $P(-3, -4)$, $Q(3, -3)$, $R(3, -2)$, $S(-3, 2)$



5. $E(-4, 1)$, $F(-2, 3)$, $G(-2, -4)$

6. $T(1, -2)$, $U(4, 1)$, $V(2, 3)$, $W(-1, 0)$

