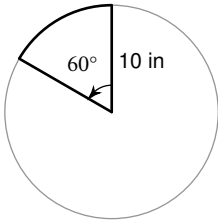
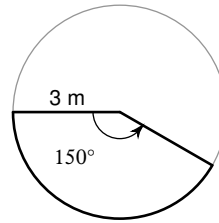


Find the area of each sector. Round your answers to the nearest tenth.

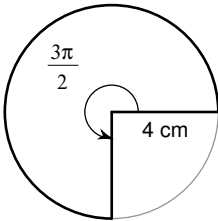
13)



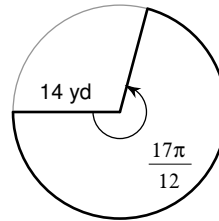
14)



15)

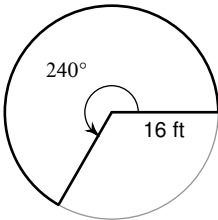


16)

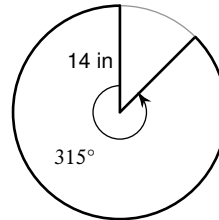


Find the area of each sector. Do not round.

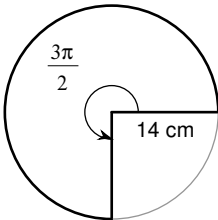
17)



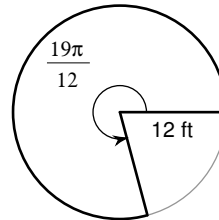
18)



19)



20)



21) $r = 10$ mi, $\theta = \frac{\pi}{2}$

22) $r = 12$ yd, $\theta = \frac{5\pi}{3}$

23) $r = 7$ km, $\theta = 60^\circ$

24) $r = 7$ mi, $\theta = 225^\circ$