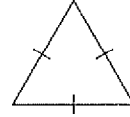


Naming Triangles

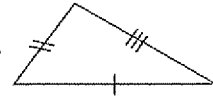
EXAMPLE

Tick marks show whether sides have the same or different lengths.

This triangle has 3 sides of the same length.

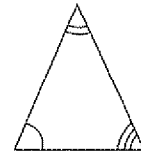


This triangle has sides of 3 different lengths.

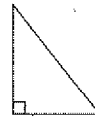


Arcs show whether angles are the same or different.

This triangle has angles with 3 different measures.

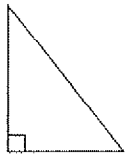


A square is used to show a 90° angle.

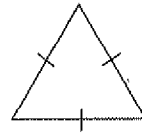


Directions Write the name of each triangle. Some triangles may have more than one name.

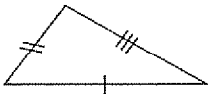
1.



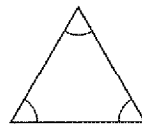
2.



3.



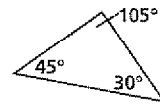
4.



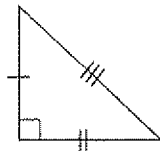
5.



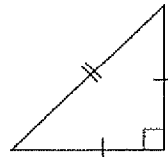
6.



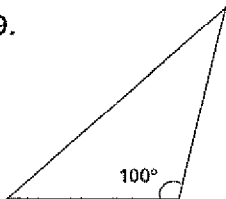
7.



8.



9.



10.

